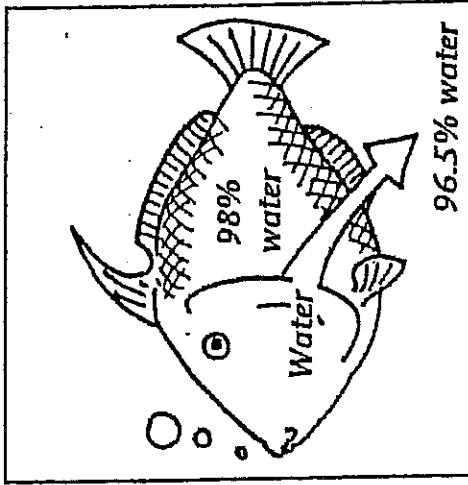


# The Cell in Its Environment

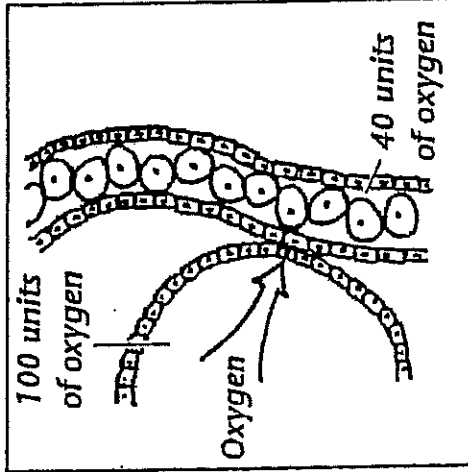
## ◆ Understanding Main Ideas

Fill in the blank to identify the process illustrated in each of the following figures.



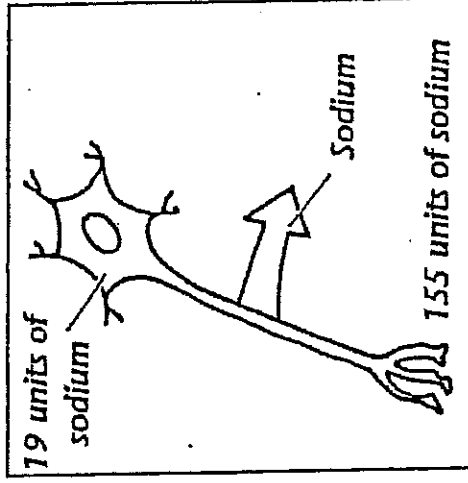
Water moves out of the cells of a saltwater fish and into the ocean.

1. \_\_\_\_\_



Oxygen moves from the lungs into the bloodstream.

2. \_\_\_\_\_



Sodium is pumped out of a nerve cell.

3. \_\_\_\_\_