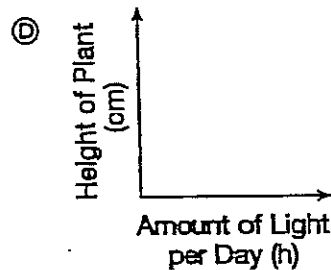
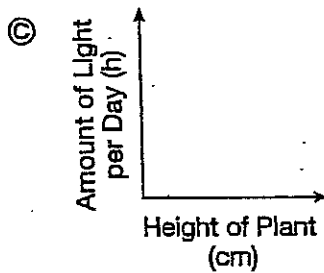
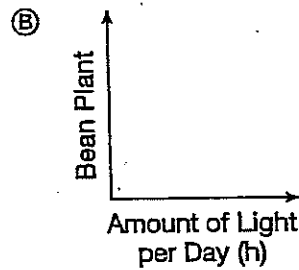
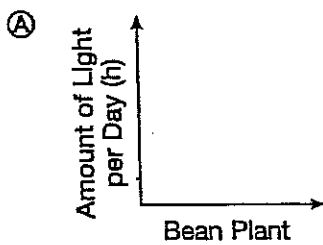


A student did an experiment to test how amount of light affects the growth of bean plants. Her data are shown in the table below.

Bean Plant Data

Bean Plant	Light per Day (h)	Height after 4 Weeks (cm)
1	6	35
2	9	40
3	12	42

1. The student needs to make a graph to show her data. Which graph shows correctly labeled axes for these data?



2. What should the title be for a graph using the Bean Plant Data?