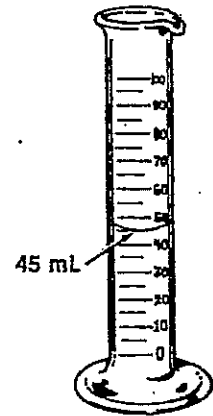

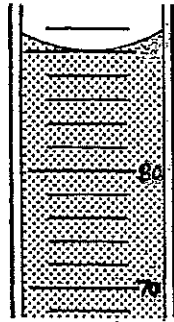
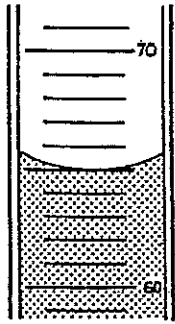

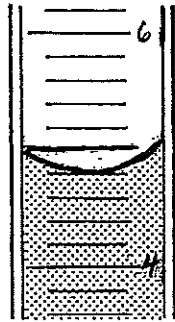
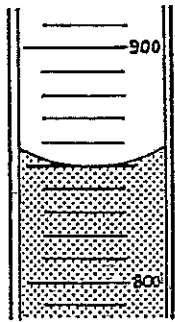


MEASUREMENTS USED IN BIOLOGY

1. Look at the graduated cylinder on the right. Note the lines and numbers printed on its sides. The graduated cylinder is filled to the 45 mL mark. Read the level of the liquid in each of the graduated cylinders below. Write the correct volume on the line below each graduated cylinder.





2. In each space, write one of the following phrases that best matches the temperature shown. Use these phrases—water for bath, water freezes, water boils, a cool day, and human with fever.

